

Name \_\_\_\_\_

Date \_\_\_\_\_ Period \_\_\_\_\_


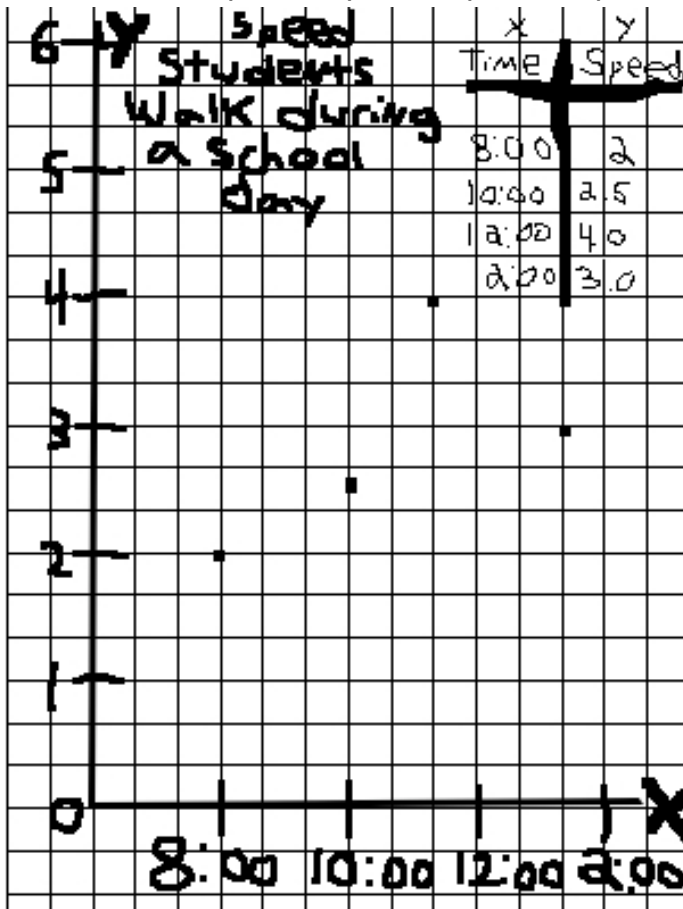
## Graphing Practice: Point Graphs

**Directions:** Grade each graph and then make a “A” graph on the right.

### Science Graph Grading

Requirements	Points Possible	Your score	Teacher's score
Title present	1		
Title describes what the graph is about	1		
Appropriate graph type made (bar, line etc.....)	1		
x-axis labeled with units (cm, mm, etc...)	1		
y-axis labeled with units (cm, mm, etc.)	1		
x-axis scale is labeled (numbers, names of groups)	1		
y-axis scale is labeled (numbers, etc.)	1		
Graph uses 80% or more of the paper	1		
Graph is neat and easy to read	1		
Graph is accurate and matches the data table	1		
<b>Total</b>	<b>10</b>		

A=9-10 pts B=8 pts C=7 pts D= 6 pts F=0-5 pts



1. What was wrong with the graph?

---

---

---


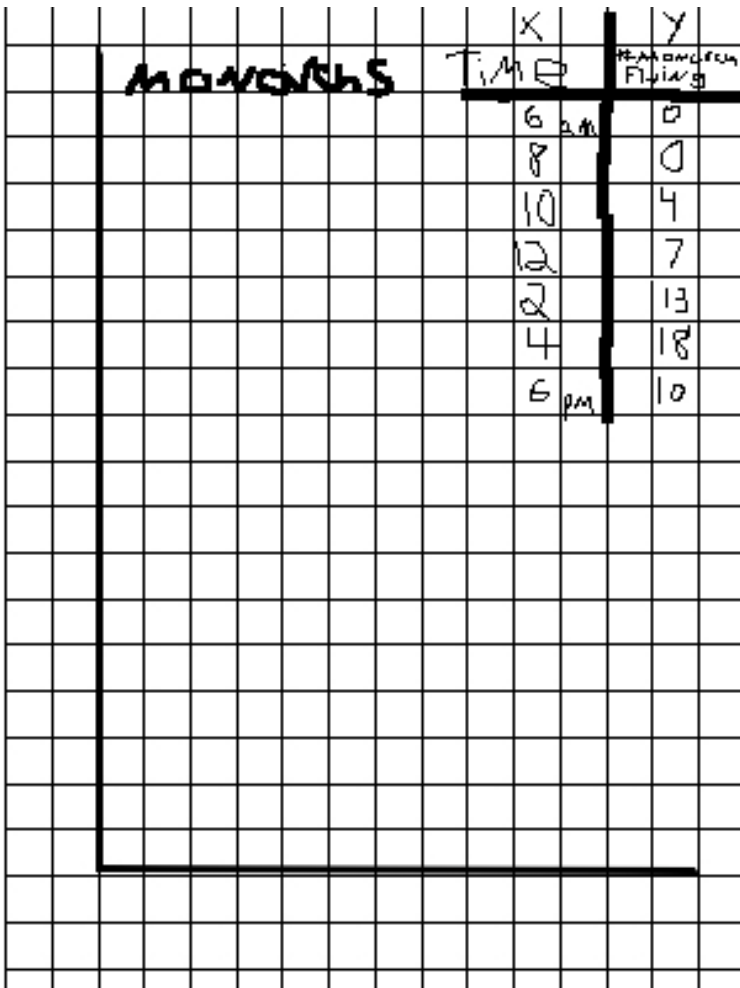
What grade would you give the graph? \_\_\_\_\_



# Science Graph Grading

Requirements	Points Possible	Your score	Teacher's score
Title present	1		
Title describes what the graph is about	1		
Appropriate graph type made (bar, line etc.....)	1		
x-axis labeled with units (cm, mm, etc...)	1		
y-axis labeled with units (cm, mm, etc.)	1		
x-axis scale is labeled (numbers, names of groups)	1		
y-axis scale is labeled (numbers, etc.)	1		
Graph uses 80% or more of the paper	1		
Graph is neat and easy to read	1		
Graph is accurate and matches the data table	1		
<b>Total</b>	<b>10</b>		

A=9-10 pts B=8 pts C=7 pts D= 6 pts F=0-5 pts



2. What was wrong with the graph?

---

---

---


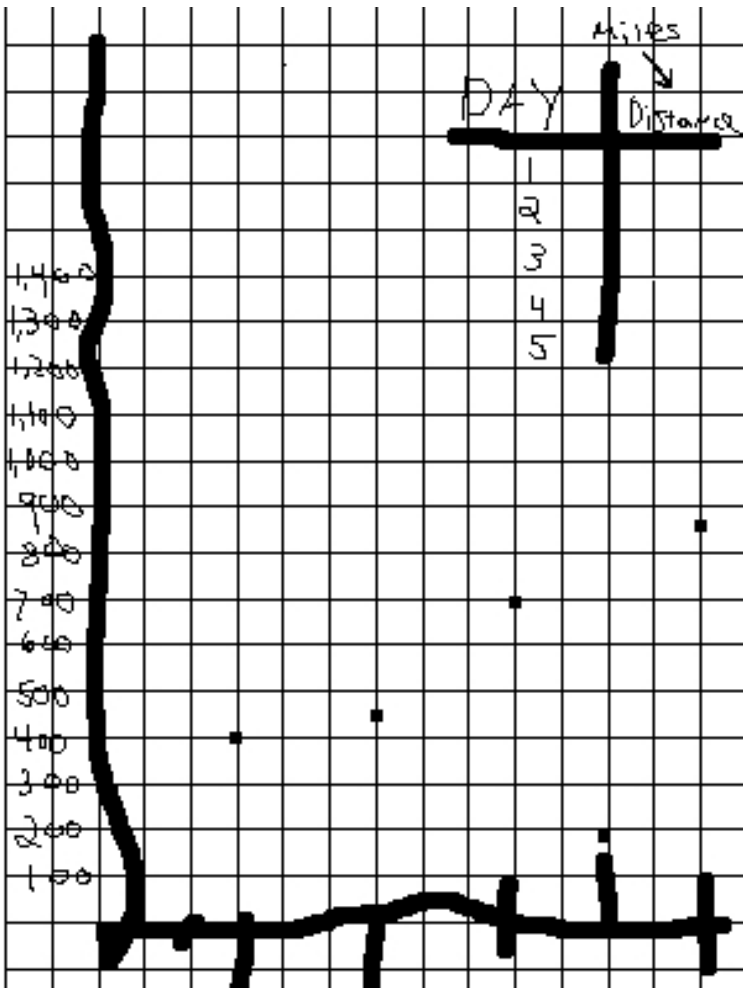
What grade would you give the graph? \_\_\_\_\_



# Science Graph Grading

Requirements	Points Possible	Your score	Teacher's score
Title present	1		
Title describes what the graph is about	1		
Appropriate graph type made (bar, line etc.....)	1		
x-axis labeled with units (cm, mm, etc...)	1		
y-axis labeled with units (cm, mm, etc.)	1		
x-axis scale is labeled (numbers, names of groups)	1		
y-axis scale is labeled (numbers, etc.)	1		
Graph uses 80% or more of the paper	1		
Graph is neat and easy to read	1		
Graph is accurate and matches the data table	1		
<b>Total</b>	<b>10</b>		

A=9-10 pts B=8 pts C=7 pts D= 6 pts F=0-5 pts



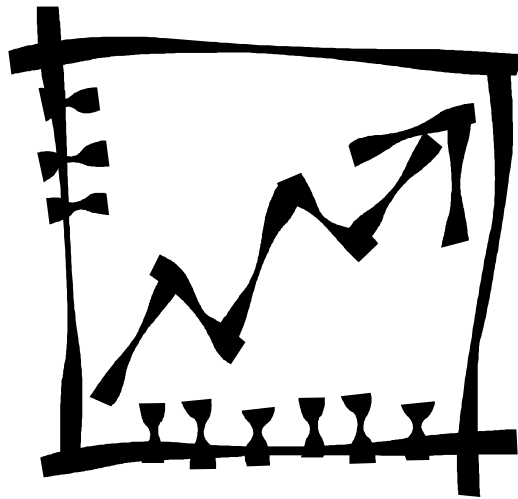
3. What was wrong with the graph?

---

---

---


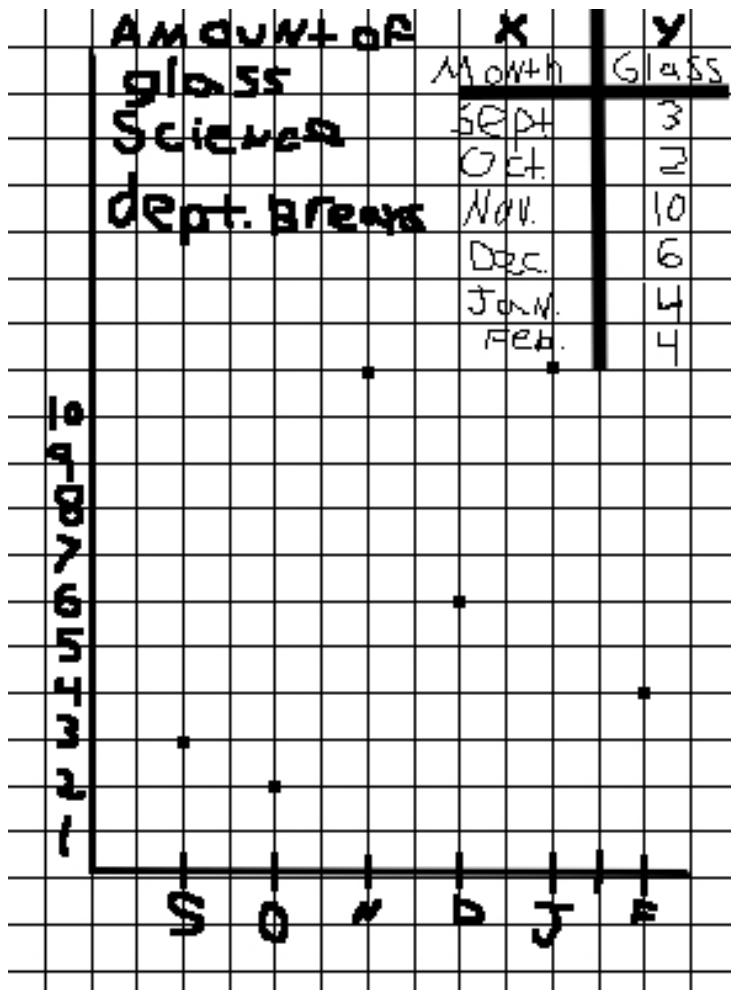
What grade would you give the graph? \_\_\_\_\_



# Science Graph Grading

Requirements	Points Possible	Your score	Teacher's score
Title present	1		
Title describes what the graph is about	1		
Appropriate graph type made (bar, line etc.....)	1		
x-axis labeled with units (cm, mm, etc...)	1		
y-axis labeled with units (cm, mm, etc.)	1		
x-axis scale is labeled (numbers, names of groups)	1		
y-axis scale is labeled (numbers, etc.)	1		
Graph uses 80% or more of the paper	1		
Graph is neat and easy to read	1		
Graph is accurate and matches the data table	1		
<b>Total</b>	<b>10</b>		

A=9-10 pts B=8 pts C=7 pts D= 6 pts F=0-5 pts



4. What was wrong with the graph?

---

---

---

What grade would you give the graph? \_\_\_\_\_

